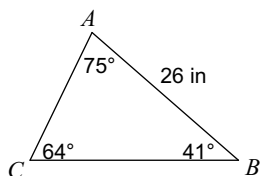


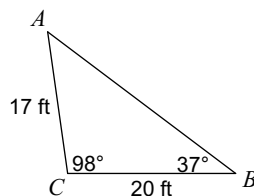
Practice with the Law of Sines

Find each measurement indicated. Round your answers to the nearest tenth.

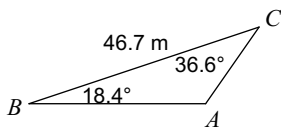
1) Find BC



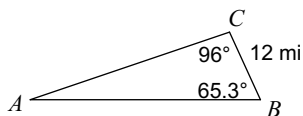
2) Find AB



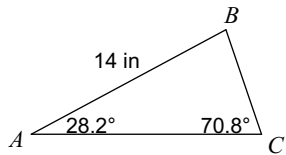
3) Find AB



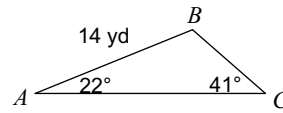
4) Find AB



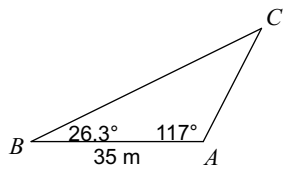
5) Find BC



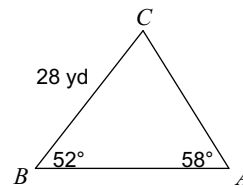
6) Find BC



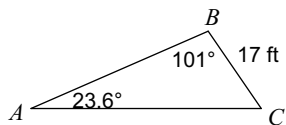
7) Find AC



8) Find AC



9) Find AC



10) Find AC

